



INDIAN SCHOOL AL WADI AL KABIR

DEPARTMENT OF MATHEMATICS (2022-2023)

TOPIC: MEASUREMENTS

RESOURCE PERSON: Ms. FLAVIA CASTELINO

RECALL WORKSHEET

NAME: _____ CLASS: V SEC: _____ DATE: _____

Read the instructions and do as directed.

I. Fill in the blanks with the correct unit of measurement.

- 1) My weight is 36 _____.
- 2) The length of my pencil is 12 _____.
- 3) My mother gave me 10 _____ of medicine.
- 4) Capacity of a car fuel tank is 50 _____.
- 5) A water-melon weighs about 2 _____.
- 6) Thickness of my ruler is 1 _____.
- 7) The height of my mother is 158 _____.
- 8) The height of my building is 9 _____.

II. Convert the units and fill in the blanks.

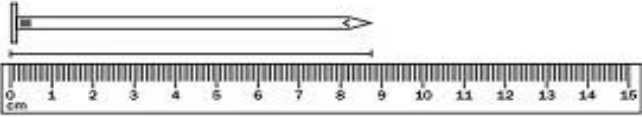

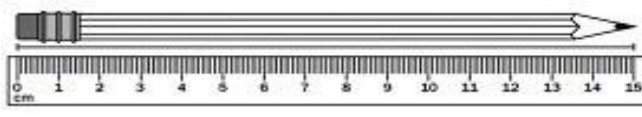
- 1) 8 cm = _____ mm.
- 2) 4 kg = _____ g.
- 3) 5 l = _____ ml.
- 4) 500 cm = _____ m.
- 5) $7\frac{1}{2}$ km = _____ m.
- 6) $3\frac{1}{4}$ litres = _____ ml.

III. Match the following.

	Column A		Column B
a)	$\frac{1}{4}$ of a kilometre	(i)	25 centimetre
b)	$\frac{1}{4}$ of a metre	(ii)	50 centimetre
c)	$\frac{3}{4}$ of a kilometre	(iii)	500 metre
d)	$\frac{1}{2}$ of a metre	(iv)	250 metre
e)	$\frac{1}{2}$ of a kilometre	(v)	75 centimetre
f)	$\frac{3}{4}$ of a metre	(vi)	750 metre

Answer: a) _____ b) _____ c) _____ d) _____ e) _____ f) _____

IV. Write the lengths of the following objects in cm as shown in the pictures.

	Objects	Measurement
a)		_____
b)		_____
c)		_____